

HW page 43 <-- warmup: check your answers!

Write a function rule for each table.

x	y
-3	-6
-2	-4
-1	-2
0	0
1	2
2	4
3	6

$$y = 2x$$

x	y
-3	6
-2	4
-1	2
0	0
1	-2
2	-4
3	-6

$$y = -2x$$

x	y
-3	-4
-2	-3
-1	-2
0	-1
1	0
2	1
3	2

$$y = x - 1$$

x	f(x)
-3	4
-2	5
-1	6
0	7
1	8
2	9
3	10

$$y = x + 7$$

x	y
-3	-5
-2	-4
-1	-3
0	-2
1	-1
2	0
3	1

$$y = x - 2$$

x	f(x)
-3	-5
-2	-3
-1	-1
0	1
1	3
2	5
3	7

$$y = 2x + 1$$

x	y
-3	-8
-2	-6
-1	-4
0	-2
1	0
2	2
3	4

$$y = 2x - 2$$

x	y
-3	-14
-2	-9
-1	-4
0	1
1	6
2	11
3	16

$$y = 5x + 1$$

Write a function rule for each situation.

9. The cost (c) of buying bananas at \$.40 a pound (p). $c = .40p$

10. The total (t) to rent a cabin, where a resort charges \$50 plus \$10 per person (p). $t = 10p + 50$

11. The cost (c) of renting a truck for \$30 and then paying \$2 per mile (m). $c = 2m + 30$

12. The weight (w) of a football player who starts at 160 pounds and then gains 4 pounds a month (m).

$$w = 4m + 160$$

* 13. The weight (w) of a lady who starts at 160 pounds and then diets and loses 10 pounds a month (m).

$$w = -10m + 160$$

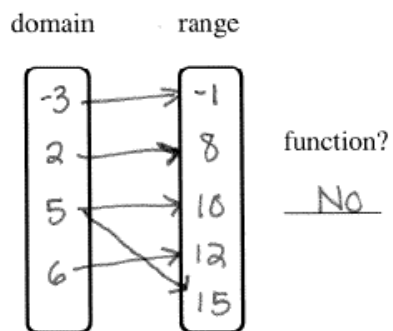
* 14. The profit (p) you would keep from selling shirts (s) for \$10 each when you paid \$200 for all of them.

$$P = 10s - 200$$

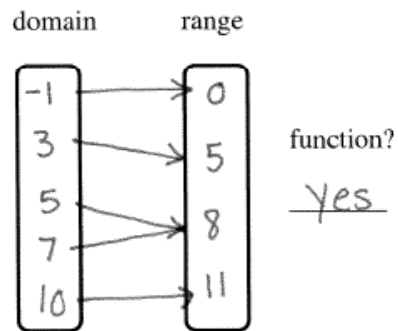
Review: [HW page 44](#)

Map the domain and range for each list of points. **Don't forget to draw arrows.** Then say if the relation is also a function.

1. $\{(2, 8), (5, 10), (-3, -1), (6, 12), (5, 15)\}$



2. $\{(-1, 0), (3, 5), (5, 8), (7, 8), (10, 11)\}$

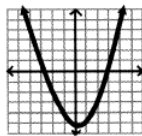


Tell if each graph is a function or not.

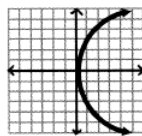
a.



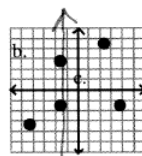
yes



yes



No



No

Circle each of the points below that would be on the line given by the function rule:

$$3x + y = 14$$

a. (2, 8)

$$\begin{aligned} 3(2) + 8 &= 14 \\ 6 + 8 &= 14 \\ 14 &= 14 \\ \text{yes} \end{aligned}$$

b. (-5, 1)

$$\begin{aligned} 3(-5) + 1 &= 14 \\ -15 + 1 &= 14 \\ -14 &= 14 \\ \text{No} \end{aligned}$$

c. (6, -4)

$$\begin{aligned} 3(6) + (-4) &= 14 \\ 18 - 4 &= 14 \\ 14 &= 14 \\ \text{yes} \end{aligned}$$

d. (-2, 20)

$$\begin{aligned} 3(-2) + 20 &= 14 \\ -6 + 20 &= 14 \\ 14 &= 14 \\ \text{yes} \end{aligned}$$

e. (5, -1)

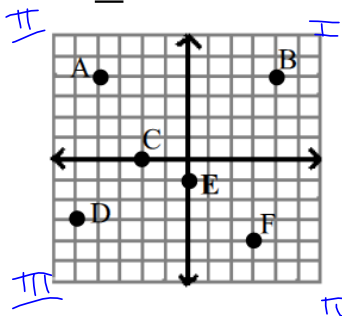
$$\begin{aligned} 3(5) + (-1) &= 14 \\ 15 - 1 &= 14 \\ 14 &= 14 \\ \text{yes} \end{aligned}$$

Unit 4 Practice Test

Name _____
Date _____ Per. _____

Name the points from the graph and say what quadrant the point is in or which axis it is on:

~~7.~~ Give the domain and range ~~of the points.~~

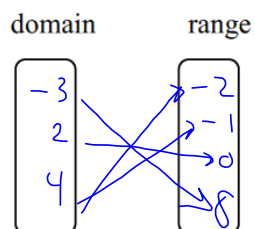


- 1. A (-4 , 4), Quadrant or axis II Domain: _____
- 2. B (4 , 4), Quadrant or axis _____ Range: _____
- 3. C (-2 , 0), Quadrant or axis x-axis
- 4. D (-4 , -2), Quadrant or axis _____
- 5. E (0 , -1), Quadrant or axis y-axis
- 6. F (2 , -2), Quadrant or axis _____ Function? _____

8

Map the domain and range for the following set of points and tell if it is a function. (Don't forget the arrows on your map.).

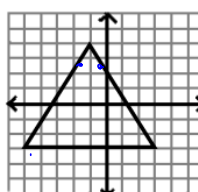
8. $\{(4, -2), (2, 0), (-3, 8), (4, -1)\}$



Function? no

Give the domain and range of each graph and tell if the graph is a function or not.

9.



Function? no

Challenge!

Give the domain:

$[-5, 3]$

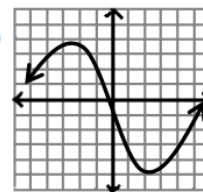
Give the range:

$[-3, 4]$

$-5 \leq x \leq 3$

$-3 \leq y \leq 4$

10



Function? _____

Challenge!

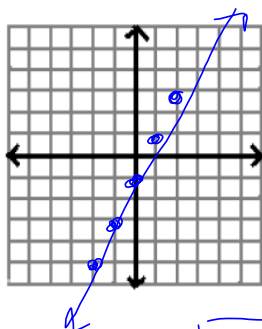
Give the domain:

Give the range:

Make a table and graph for the given function rule and the domain $\{-2 \leq x \leq 2\}$:

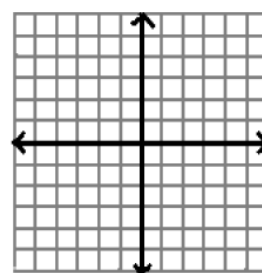
11. $y = 2x - 1$

x	y
-2	-5
-1	-3
0	-1
1	1
2	3



12. $f(x) = -2x + 1$

x	f(x)



13. Which points are on the following line? $4y = 2x + 6$

a. (3, 3)

b. (-2, 2)

c. (-5, -1)

d. (-3, 0)

$$4(3) = 2(3) + 6$$

$$12 = 6 + 6$$

yes

$$4(2) = 2(-2) + 6$$

$$8 = -4 + 6$$

no

$$4(-1) = 2(-5) + 6$$

$$-4 = -10 + 6$$

yes

$$4(0) = 2(-3) + 6$$

$$0 = 0$$

yes

Write a function rule for each table or situation: (* Don't forget to write $y =$ in front!)

14.

x	y
-2	-5
-1	-4
0	-3
1	-2
2	-1

Rule: _____

15.

x	y
-2	8
-1	4
0	0
1	-4
2	-8

Rule: $y = -4x$

$$y = 4x - 1$$

16.

x	y
-2	-5
-1	-2
0	1
1	4
2	7

Rule: _____

First, write a function rule for the following situation, then answer the question using your function rule.

17. a. The total cost (c) from a produce bar, when the sign says \$2.25 per pound (p)

Rule: $c = 2.25p$

- b. Your mother sends you to buy 3 pounds of produce for a party.

How much will it be? $c(3) = 2.25(3)$

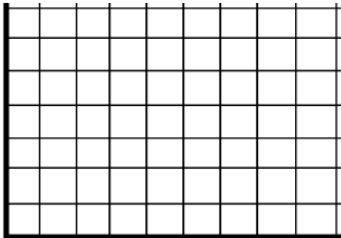
18. In the above situation, what is the **independent** variable? pounds of produce $= \$6.75$
What is the **dependent** variable? cost

cost depends on pounds of fruit

19. You and your band decide to have a party to celebrate the success of your new CD. A nearby restaurant tells you it will be \$100 to rent their banquet room and \$20 a dinner (**d**). Write a **function rule** for the situation. Then **find and graph** the cost (**c**) of dinner for 10, 20, 30, 40, and 50 people. Don't forget to **label** your graph.

Function Rule:

d	c



20. In the above situation: What is the **independent** variable? _____
What is the **dependent** variable? _____

Match each of the word situations with the correct graph.

- a. The amount of power in a cell phone battery as it charges from 20% to 100%.
- b. The amount of power in a cell phone as a person uses it to watch videos.
- c. The amount of power in a cell phone that has been turned completely off.

